

NTI DAY #4  
(weather-closed school day)

PACKET  
FOUR  
(Social Studies)

General Directions:

Due to weather, Harrison County Schools are closed. In an effort to utilize this day on the school calendar, your child is assigned and should work on this “packet” of school work today. It will count as a grade for this subject. The work attached is specific to the subject listed above. Please contact your child’s teacher of this subject at 234-7123 in the event you/your student have questions on this packet. Staff and teachers reported to HCMS today and are available should you have questions.

While this is DUE no later than the last school day before the 3<sup>rd</sup> nine-weeks ends, we *strongly encourage* students to turn it in to their teacher as soon as it’s complete (soon after the NTI day) to avoid it being lost, eaten by the family pet, burned to keep warm, etc



Name: \_\_\_\_\_

Class Period: \_\_\_\_\_

### NTI Day 4 Checklist

All students must complete the following 2 assignments:

\_\_\_\_\_ Longitude and Latitude Crossword Review

\_\_\_\_\_ Geography Skills Packet (write answers on the answer sheet)

All students must select 2 of the following assignments to complete:

\_\_\_\_\_ Products Montana Crossword Map Skills Review

\_\_\_\_\_ 5 Themes of Geography Worksheet

\_\_\_\_\_ Spend 30 minutes playing any of the geography games listed below. Have an adult initial that you did this on the line to the left.

**Smarty Pins with Google Maps**

<https://smartypins.withgoogle.com/>

**GeoGuessr**

<https://geoguessr.com/>

**Free Rice - Geography Editions**

<http://freerice.com/#/identify-countries-map/847>

<http://freerice.com/#/world-landmarks/1346457>

<http://freerice.com/#/world-capitals/13623>

**Seterra Map Quizzes**

<https://online.seterra.com/en>

\_\_\_\_\_ Use the CIA World Factbook Webpage to research a country of your choice and complete the Country Research worksheet.

<https://www.cia.gov/library/publications/the-world-factbook/>

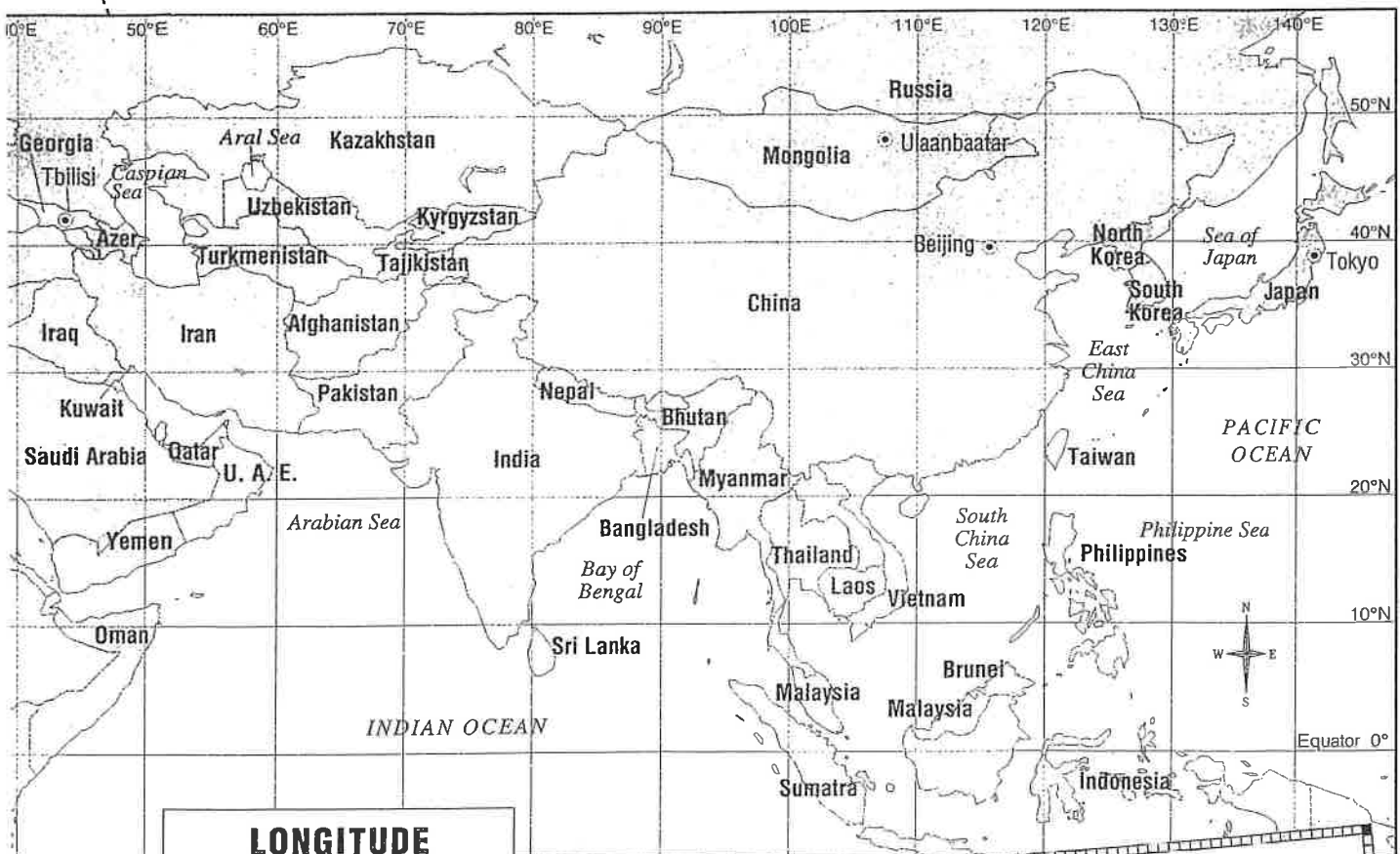


# Longitude and Latitude

Class Peri \_\_\_\_\_

## South Asia

No matter where you are on earth, you can find out your location by using a special system called the global grid. This grid is made up of imaginary lines called latitude and longitude. If you imagine that the earth is an apple, lines of latitude, also called parallels, would slice the apple across into disks. The line around the middle is called the equator, and everything above that line is north; everything below it is south. Lines of longitude, also called meridians, would slice the apple from top to bottom into wedges. These lines meet at the top of the earth at the North Pole and at the bottom at the South Pole. A line that runs from north to south through England is called the Prime Meridian. All lines to the right of this are east; all lines to the left are west.




### LONGITUDE AND LATITUDE: South Asia

- ⊙ Capital city
- National boundary

### DID YOU KNOW?

The Greek geographer Ptolemy who lived from AD 100–170 included listings of longitude and latitude in his famous book about mapmaking.

# Longitude and Latitude



## Across

- 4 The line 10°N crosses over the following countries: Phillipines, Vietnam, Thailand, and \_\_\_\_\_.
- 6 The \_\_\_\_\_ Sea is located where the lines 20°N and 70°E cross.
- 7 When listing the location of a place, the degree of latitude is always listed \_\_\_\_\_.
- 9 The line that is 0° latitude is also called the \_\_\_\_\_.
- 10 As you move north or south from the equator, lines of longitude become \_\_\_\_\_ to one another.
- 11 This tiny country, located on the 90° E meridian, is squeezed between China and India.
- 13 The capital of Mongolia is located at 48°N, 108°E.
- 18 The countries shown on this map make up the continent of \_\_\_\_\_.
- 20 The capital of Georgia, located at about 42°N is called \_\_\_\_\_.
- 21 Longitude and latitude are measured in \_\_\_\_\_.
- 22 This large country spreads across Asia from 80°E to 130°E.
- 23 Lines of longitude, or meridians, run from north to \_\_\_\_\_.
- 24 The lines 50°N and 100°E cross in this country.

## Down

- 1 Another word for lines of latitude is \_\_\_\_\_.

- 2 Between Japan and Korea, at 40°N is the Sea of \_\_\_\_\_.
- 3 Lines that run across the globe east to west are called lines of \_\_\_\_\_.
- 5 Above the equator, the higher the number of latitude, the farther \_\_\_\_\_ you are.
- 8 Lines of latitude run from east to \_\_\_\_\_.
- 10 This large sea is actually a lake, and is located at 40°N, 50°E.
- 12 As you move closer to the equator, the temperature is usually \_\_\_\_\_.
- 14 When listing the location of a place, the degree of longitude is always listed \_\_\_\_\_.
- 15 The capital of China which is located on the 40th parallel is \_\_\_\_\_.
- 16 China is located in which direction from the Prime Meridian?
- 17 There are \_\_\_\_\_ degrees between the lines of latitude shown on this map.
- 19 Spell backwards this large country, which is located mostly above 50° N.
- 20 This capital city is located very close to the meridian 140°E.

Name: \_\_\_\_\_

**NTI Packet Geography Skills Answer Sheet**

**Page 1**

21. \_\_\_\_\_

22. \_\_\_\_\_

23. \_\_\_\_\_

24. \_\_\_\_\_

**Page 2**

21. \_\_\_\_\_

22. \_\_\_\_\_

23. \_\_\_\_\_

24. \_\_\_\_\_

**Page 3**

21. \_\_\_\_\_

22. \_\_\_\_\_

23. \_\_\_\_\_

**Page 4**

21. \_\_\_\_\_

22. \_\_\_\_\_

23. \_\_\_\_\_

24. \_\_\_\_\_

**Page 5**

21. \_\_\_\_\_

22. \_\_\_\_\_

23. \_\_\_\_\_

**Page 6**

21. \_\_\_\_\_

22. \_\_\_\_\_

23. \_\_\_\_\_

**Page 7**

21. \_\_\_\_\_

22. \_\_\_\_\_

23. \_\_\_\_\_

**Page 8**

21. \_\_\_\_\_

22. \_\_\_\_\_

23. \_\_\_\_\_

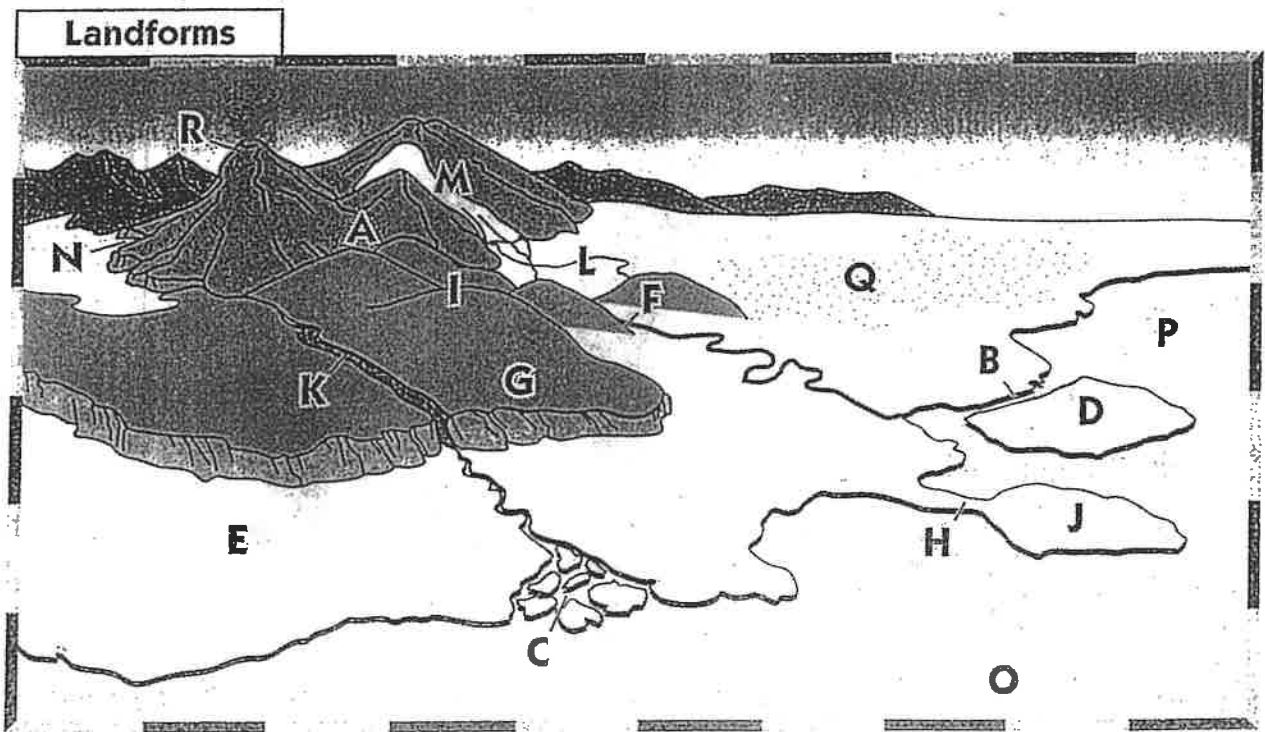




**Chapter Test  
Form A (continued)**

**Applying Skills**

**Reading a Diagram:** Use the diagram below to answer the questions that follow. (5 points each)



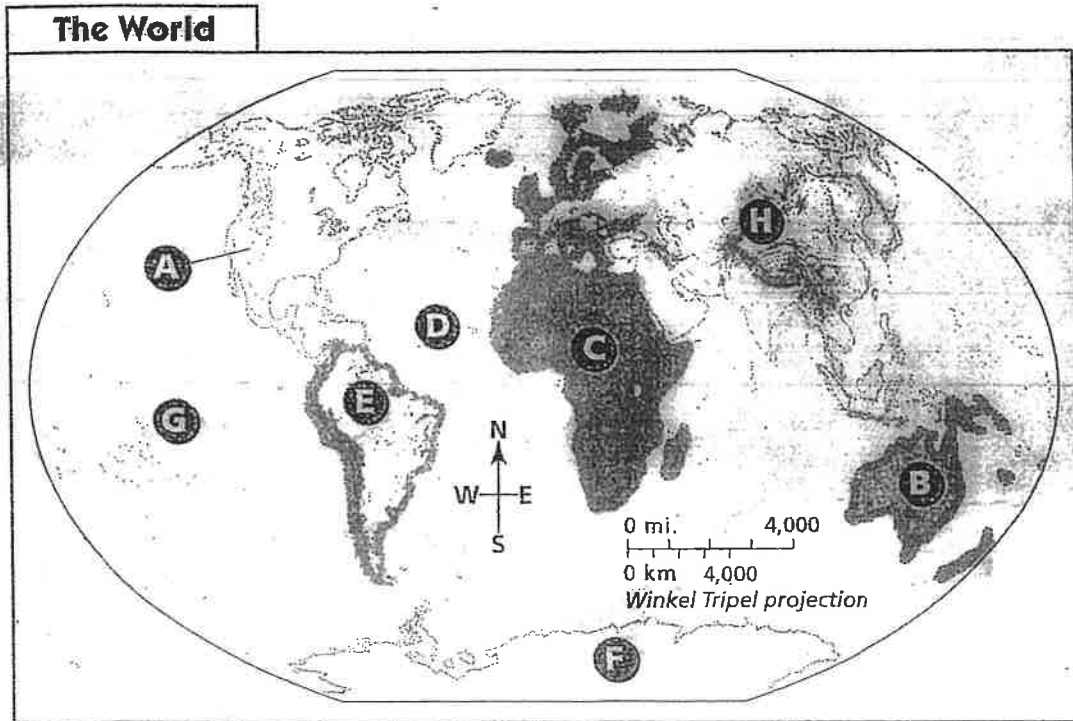
- \_\_\_\_\_ 21. According to the diagram, what type of landform is "H"?
- |              |            |
|--------------|------------|
| A. island    | C. isthmus |
| B. peninsula | D. strait  |
- \_\_\_\_\_ 22. Which of the following letters represents a volcano on the diagram?
- |      |      |
|------|------|
| A. A | C. M |
| B. K | D. R |
- \_\_\_\_\_ 23. Which of the following is labeled as "L" on the diagram?
- |           |            |
|-----------|------------|
| A. strait | C. glacier |
| B. lake   | D. gulf    |
- \_\_\_\_\_ 24. According to the diagram, what does the letter "M" show?
- |            |            |
|------------|------------|
| A. volcano | C. plateau |
| B. hills   | D. glacier |

LOOKING AT THE EARTH

Chapter Test  
Form B (continued)

Applying Skills

Reading a Map: Use the map below to answer the questions that follow.  
(5 points each)



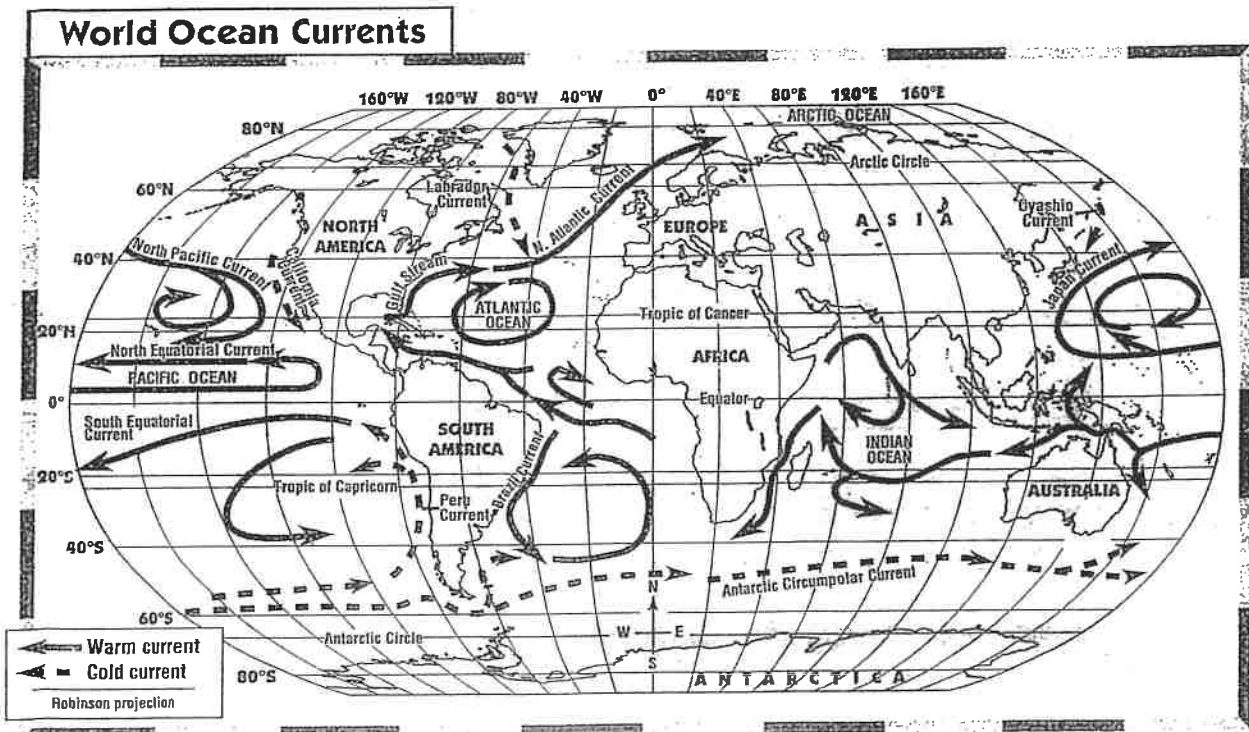
- \_\_\_\_\_ 21. Which letter on the map is located on the continent of Africa?
- |      |      |
|------|------|
| A. A | C. C |
| B. B | D. D |
- \_\_\_\_\_ 22. Which continent is labeled with the letter "H"?
- |           |              |
|-----------|--------------|
| A. Asia   | C. Europe    |
| B. Africa | D. Australia |
- \_\_\_\_\_ 23. Which continent is located north of Africa?
- |                  |               |
|------------------|---------------|
| A. North America | C. Europe     |
| B. South America | D. Antarctica |
- \_\_\_\_\_ 24. What does the letter "G" show on this map?
- |                   |                 |
|-------------------|-----------------|
| A. Atlantic Ocean | C. Indian Ocean |
| B. Pacific Ocean  | D. Arctic Ocean |

WATER, CLIMATE, AND VEGETATION

**Chapter Test  
Form A (continued)**

**Applying Skills**

**Reading a Map:** Use the map below to answer the questions that follow.  
(5 points each)



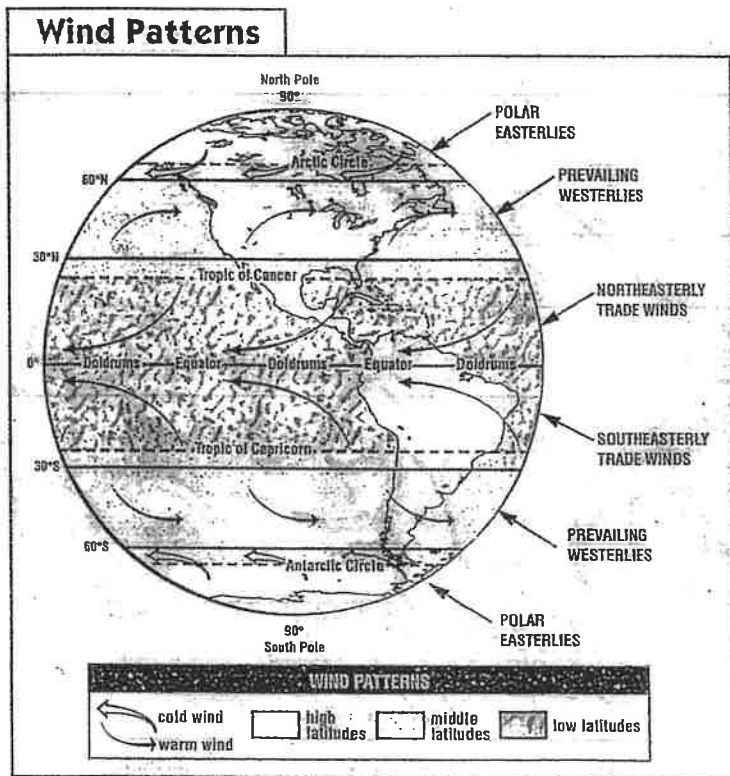
- \_\_\_\_\_ **21.** Which current warms the eastern seacoast of the United States?
- |                                  |                          |
|----------------------------------|--------------------------|
| <b>A.</b> California Current     | <b>C.</b> Gulf Stream    |
| <b>B.</b> North Atlantic Current | <b>D.</b> Brazil Current |
- \_\_\_\_\_ **22.** Which of the following is a cold current?
- |                                 |                                  |
|---------------------------------|----------------------------------|
| <b>A.</b> North Pacific Current | <b>C.</b> Japan Current          |
| <b>B.</b> Peru Current          | <b>D.</b> North Atlantic Current |
- \_\_\_\_\_ **23.** Which of the following currents cools the eastern coast of North America?
- |                            |                                  |
|----------------------------|----------------------------------|
| <b>A.</b> Labrador Current | <b>C.</b> North Atlantic Current |
| <b>B.</b> Gulf Stream      | <b>D.</b> California Current     |

**WATER, CLIMATE, AND VEGETATION**

**Chapter Test  
Form B (continued)**

**Applying Skills**

**Reading a Map:** Use the map below to answer the questions that follow.  
(5 points each)



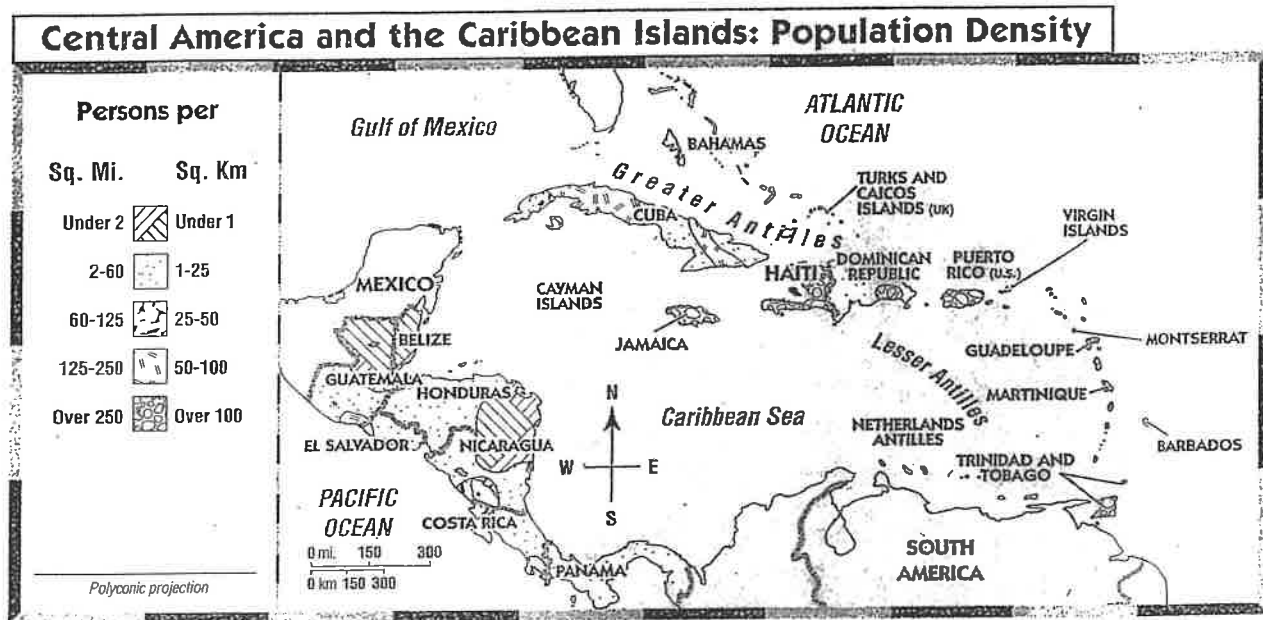
- \_\_\_\_ 21. Where do cold winds originate?
- A. Equator  
B. middle latitudes  
C. North and South Poles  
D. Tropic of Cancer and Tropic of Capricorn
- \_\_\_\_ 22. What is the name of the wind patterns found along the Equator?
- A. Polar Easterlies  
B. Prevailing Westerlies  
C. Doldrums  
D. High Latitudes
- \_\_\_\_ 23. If you lived near the Great Lakes of North America, which type of wind current would you experience?
- A. Polar Easterlies  
B. Prevailing Westerlies  
C. Northeasterly Trade Winds  
D. Southeasterly Trade Winds
- \_\_\_\_ 24. What type of winds are the Northeasterly Trade Winds?
- A. high latitude  
B. cold wind  
C. middle latitude  
D. warm wind

**CENTRAL AMERICA AND THE CARIBBEAN ISLANDS**

**Chapter Test  
Form B (continued)**

**Applying Skills**

**Reading a Map:** Use the map below to answer the questions that follow.  
(5 points each)



\_\_\_\_\_ **21.** According to the map, which of the following is the most densely populated?

- A. Belize
- B. Cuba
- C. Panama
- D. Haiti

\_\_\_\_\_ **22.** According to the map, which of the following is the least densely populated?

- A. Belize
- B. Jamaica
- C. Puerto Rico
- D. Costa Rica

\_\_\_\_\_ **23.** Based on the map, what inference can you make about the location of the capital city of the Dominican Republic?

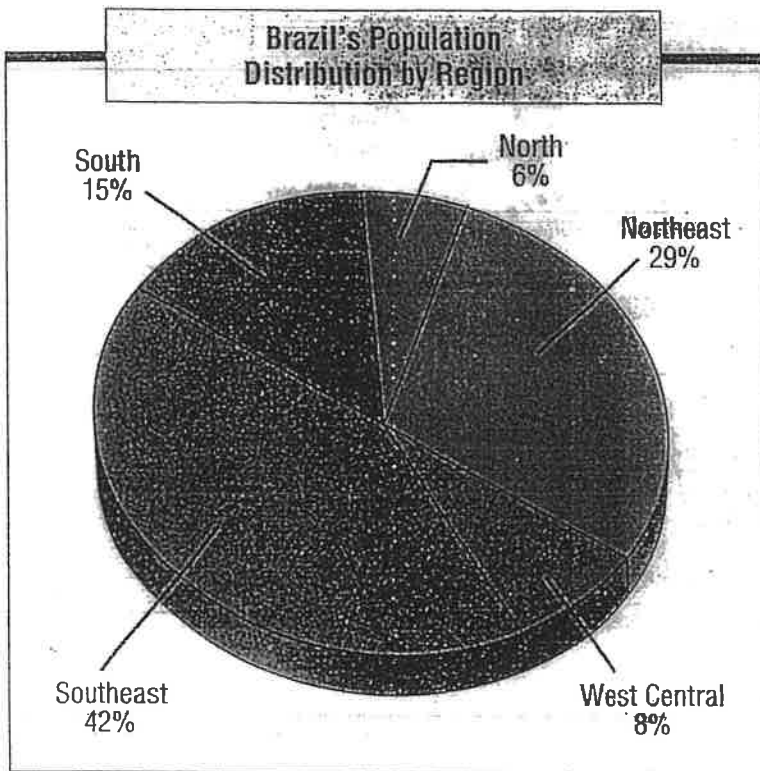
- A. It is located on the border of Haiti.
- B. It is located on the north side of the island.
- C. It is located on the southeast coast of the island.
- D. It is located along the west coast of the island.

**BRAZIL AND ITS NEIGHBORS**

**Chapter Test  
Form B (continued)**

**Applying Skills**

**Reading a Graph:** Use the graph below to answer the questions that follow.  
(5 points each)

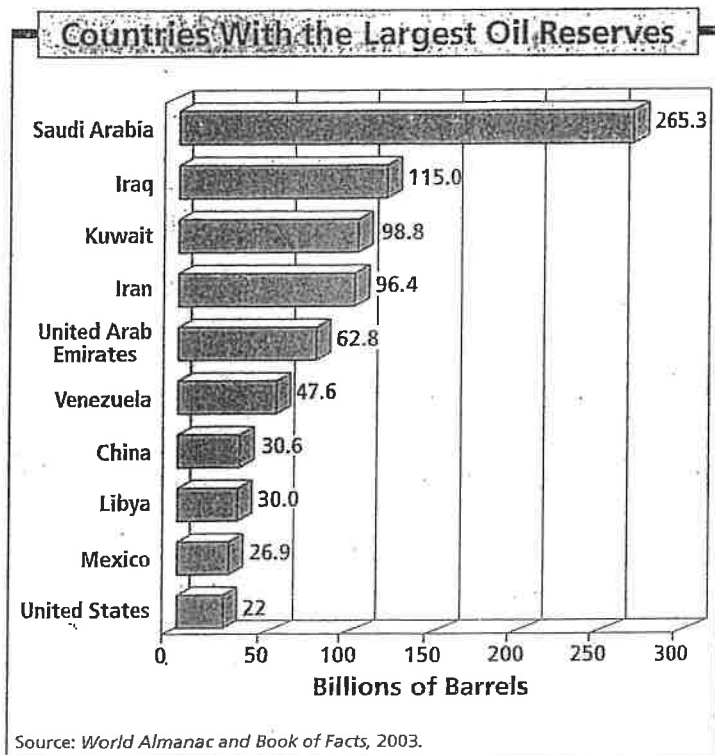


- \_\_\_\_\_ **21.** According to the circle graph, which region of Brazil has the largest population?
- |                     |                        |
|---------------------|------------------------|
| <b>A.</b> Northeast | <b>C.</b> Southeast    |
| <b>B.</b> South     | <b>D.</b> West Central |
- \_\_\_\_\_ **22.** Based on the circle graph, where can you infer that the dense Amazon Basin is located?
- |                     |                 |
|---------------------|-----------------|
| <b>A.</b> Northeast | <b>C.</b> South |
| <b>B.</b> Southeast | <b>D.</b> North |
- \_\_\_\_\_ **23.** Brazil's total population is about 176 million. Using the percentages in the circle graph, how many people live in the southeast region of Brazil?
- |                             |                             |
|-----------------------------|-----------------------------|
| <b>A.</b> about 114 million | <b>C.</b> about 42 million  |
| <b>B.</b> about 74 million  | <b>D.</b> about 42 thousand |

### Chapter Test Form A (continued)

### Applying Skills

**Reading a Graph:** Use the graph below to answer the questions that follow.  
(5 points each)



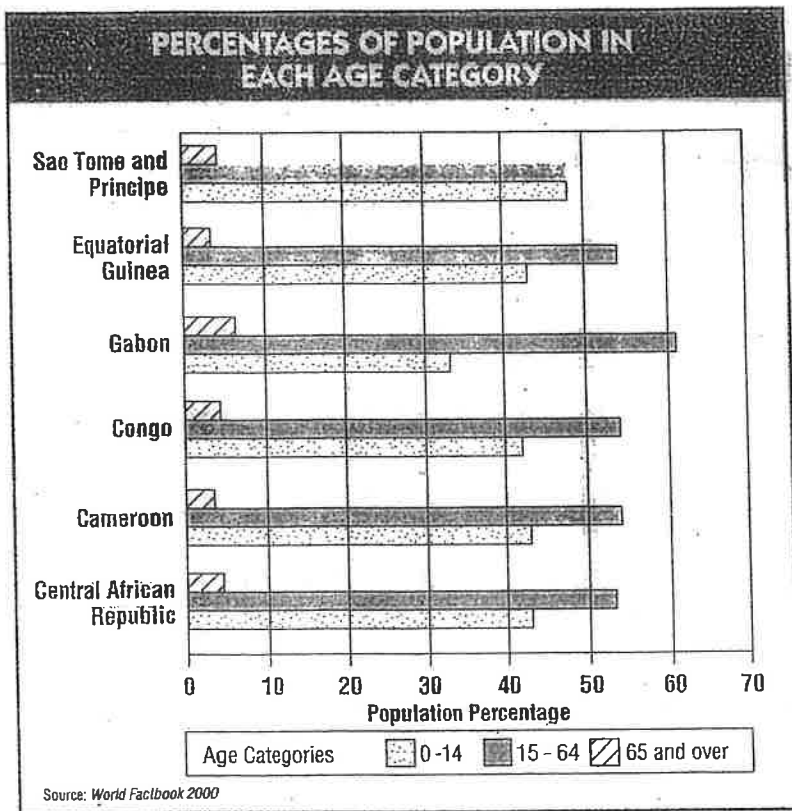
- \_\_\_\_\_ **21.** The country with the largest oil reserves is
  - A. Saudi Arabia.
  - B. Iraq.
  - C. United States.
  - D. Kuwait.
  
- \_\_\_\_\_ **22.** Approximately how many oil reserves does Iraq have?
  - A. 115 billion barrels
  - B. 30 billion barrels
  - C. 48 billion barrels
  - D. 50 billion barrels
  
- \_\_\_\_\_ **23.** Which country shown on the graph has the least amount of oil reserves?
  - A. Mexico
  - B. Libya
  - C. United States
  - D. China

CENTRAL AND EAST AFRICA

Chapter Test  
Form B (continued)

Applying Skills

Reading a Graph: Use the graph below to answer the questions that follow.  
(5 points each)



21. In which country do children ages 0–14 make up 48 percent of the population?
- A. Gabon  
B. São Tomé and Príncipe  
C. Congo  
D. Cameroon
22. Which country has the largest percentage of people aged 65 and over?
- A. Equatorial Guinea  
B. Central African Republic  
C. Gabon  
D. Congo
23. What percentage of Cameroon’s population is younger than 15 years old?
- A. about 5 percent  
B. about 33 percent  
C. about 43 percent  
D. about 53 percent

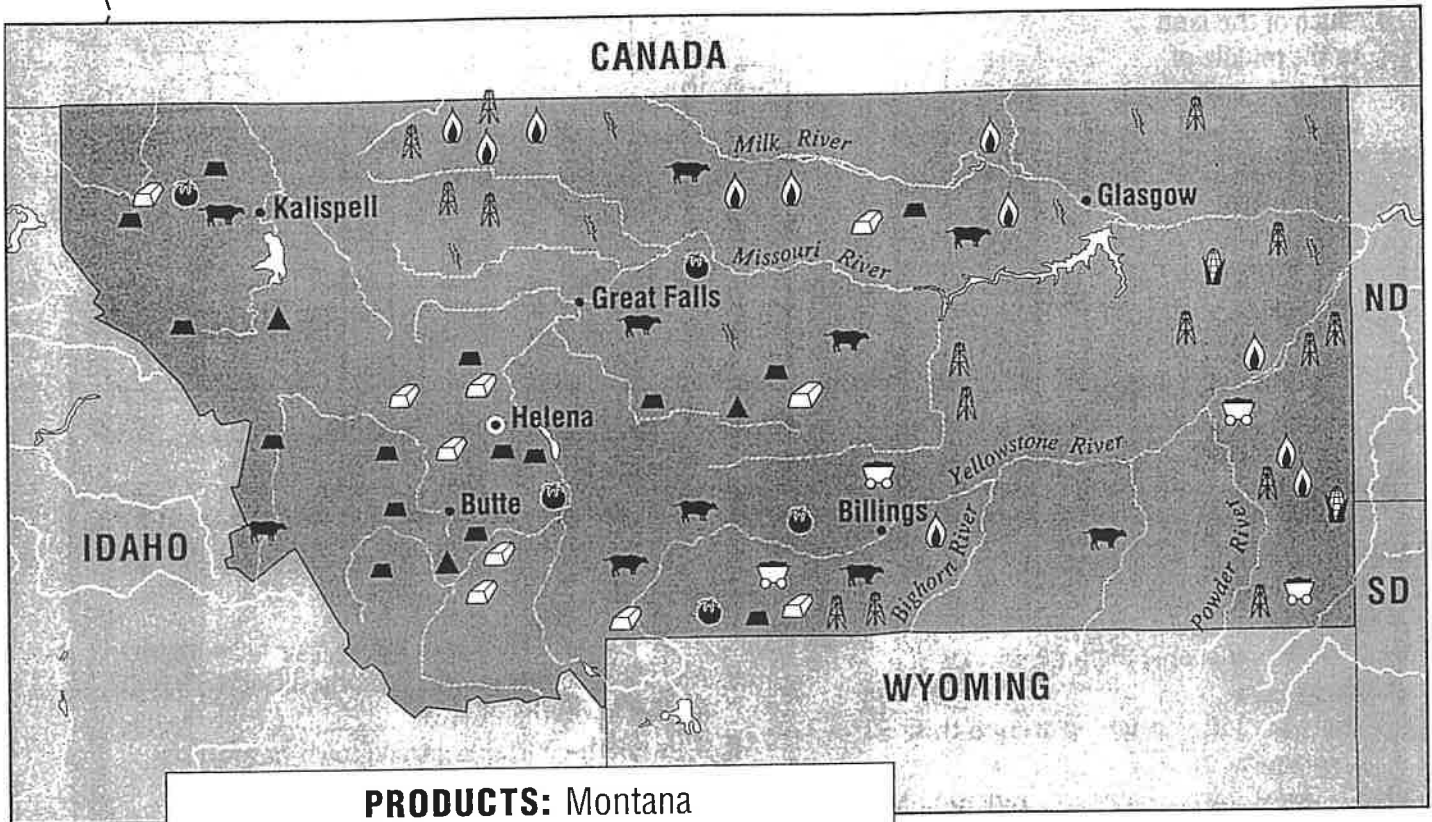
8



# Products

## Montana

A product map shows the products, or goods, that are made in a place. This map shows some of the important products in the state of Montana. It is a useful way to learn about the relationship between the geography and economy of a place.





**PRODUCTS: Montana**

Cattle	Corn	Natural gas
Coal	Gold	Petroleum (oil)
Poultry	Vegetables	State capital
Silver	Wheat	City

**DID YOU KNOW?**  
 The name *Montana* comes from a Spanish word meaning "mountainous region." The coldest temperature ever recorded in the lower 48 states was in Rogers Pass, Montana: -70° F (-57°C) in 1954.

# Products



## Across

- 4 Western town with cattle and gold nearby.
- 6 This town in northeast Montana has wheat fields nearby.
- 7 City by a river with cattle ranches east of it.
- 8 Crop that can be eaten right off the cob.
- 14 Rivers can be used for \_\_\_\_\_ or for moving products from place to place.
- 16 This product is sometimes known as "black gold."
- 18 This city in southern Montana has vegetables nearby.
- 20 The cow symbol stands for which product?
- 21 The \_\_\_\_\_ River runs by the city of Billings.
- 23 Even a little bit of this product is worth a lot of money.
- 24 Gold and silver make Montana's capital city \_\_\_\_\_, a rich town.
- 25 Most corn is grown in the \_\_\_\_\_ part of the state.

## Down

- 1 The \_\_\_\_\_ River runs across the state into North Dakota.

- 2 Most silver and gold are found in the \_\_\_\_\_ part of Montana.
- 3 Natural gas and \_\_\_\_\_ are often found near each other.
- 5 Another word for farming.
- 9 This Montana product is used to make bread and cookies.
- 10 This black rock is burned to make electricity.
- 11 The products of a place often determine what kinds of \_\_\_\_\_ people do there.
- 12 People who dig gold and silver work in \_\_\_\_\_.
- 13 A triangle shows where \_\_\_\_\_ is an important product.
- 15 The flame symbol stands for which product?
- 17 A black block is the symbol for \_\_\_\_\_.
- 18 If you are a gold digger, you might like to live in \_\_\_\_\_.
- 19 Oil and natural gas are often found \_\_\_\_\_ one another.
- 22 Where there is poultry there will always be \_\_\_\_\_.

Name: \_\_\_\_\_

### 5 Themes of Geography Review

1. List the 5 Themes of Geography. I have given you the first letter.

L  
P  
R  
M  
H

2. Washington DC is located at 39N / 77W. This is an example of \_\_\_\_\_.

3. What is the relative location of your house?

4. Each PLACE has \_\_\_\_\_ and \_\_\_\_\_ characteristics.

5. Give an example of human and physical characteristics

Human: \_\_\_\_\_

Physical: \_\_\_\_\_

6. Identify 2 ways that humans interact with their environment.

7. An group of places with common characteristics are called \_\_\_\_\_.

8. Identify each statement below as Location, Place, Movement, Region, or HEI.

\_\_\_\_\_ Cynthiana is a small town on the Licking River.

\_\_\_\_\_ The Pacific Northwest is a group of places that share a common location.

\_\_\_\_\_ Many people use the fertile soil and mild climate of Kentucky to grow crops and raise livestock.

\_\_\_\_\_ Southside is between the High School and the Middle School.

\_\_\_\_\_ The by-pass around Cynthiana changed the way people and goods move around our community.



Name: \_\_\_\_\_ Date: \_\_\_\_\_ Class Period: \_\_\_\_\_

## Country Research Project

Name of Country: \_\_\_\_\_

Name of Country's Inhabitants: \_\_\_\_\_

Language(s): \_\_\_\_\_

Capital City: \_\_\_\_\_

Currency: \_\_\_\_\_

Population: \_\_\_\_\_

Religion(s): \_\_\_\_\_

Important Rivers and Lakes: \_\_\_\_\_

Things the Country Makes and Grows: \_\_\_\_\_

Interesting Facts about the Country:

1. \_\_\_\_\_

2. \_\_\_\_\_

3. \_\_\_\_\_

